


4.1.4 Matching Motion Representations

1. Caroline started 5 feet from the motion detector and walked away at a constant rate of 1 foot per second.

Graph:



Function:





Table:




Rate _____

Start Distance _____

2. Kevin started 5 feet from the motion detector and walked toward it at a constant rate of 1 foot every 2 seconds.


Graph:



Function:



Table:




Rate _____

Start Distance _____

3. Carlos started in front of the motion detector and walked away at a constant rate of 5 feet per second.

Graph:



Function:





Table:




Rate _____

Start Distance _____

4. Kendra started 5 feet from the motion detector and didn't move.


Graph:



Function:



Table:




Rate _____

Start Distance _____

5. Kenny started 20 feet from the motion detector and walked toward it at a constant rate of 5 feet per sec.

Graph:



Function:





Table:




Rate _____

Start Distance _____

6. Karen started 1 foot from the motion detector and walked away from it at a constant 3 feet per second.


Graph:



Function:



Table:



Rate _____

Start Distance _____

$$f(x) = 5 + 1x$$

x is time in seconds

$f(x)$ is distance in feet

$$f(x) = 20 - 5x$$

x is time in seconds

$f(x)$ is distance in feet

$$f(x) = 5 + 0x$$

x is time in seconds

$f(x)$ is distance in feet

$$f(x) = 5 - \frac{1}{2}x$$

x is time in seconds

$f(x)$ is distance in feet

$$f(x) = 1 + 3x$$

x is time in seconds

$f(x)$ is distance in feet

$$f(x) = 0 + 5x$$

x is time in seconds

$f(x)$ is distance in feet

$$f(x) = 5 + 1x$$

x is time in seconds

$f(x)$ is distance in feet

$$f(x) = 20 - 5x$$

x is time in seconds

$f(x)$ is distance in feet

$$f(x) = 5 + 0x$$

x is time in seconds

$f(x)$ is distance in feet

$$f(x) = 5 - \frac{1}{2}x$$

x is time in seconds

$f(x)$ is distance in feet

$$f(x) = 1 + 3x$$

x is time in seconds

$f(x)$ is distance in feet

$$f(x) = 0 + 5x$$

x is time in seconds

$f(x)$ is distance in feet

x, in sec	f(x), in ft
0	5
1	6
2	7
3	8
4	9

x, in sec	f(x), in ft
0	5
1	4.5
2	4
3	3.5
4	3

x, in sec	f(x), in ft
0	0
1	5
2	10
3	15
4	20

x, in sec	f(x), in ft
0	5
1	5
2	5
3	5
4	5

x, in sec	f(x), in ft
0	20
1	15
2	10
3	5
4	0

x, in sec	f(x), in ft
0	1
1	4
2	7
3	10
4	13

x, in sec	f(x), in ft
0	5
1	6
2	7
3	8
4	9

x, in sec	f(x), in ft
0	5
1	4.5
2	4
3	3.5
4	3

x, in sec	f(x), in ft
0	0
1	5
2	10
3	15
4	20

x, in sec	f(x), in ft
0	5
1	5
2	5
3	5
4	5

x, in sec	f(x), in ft
0	20
1	15
2	10
3	5
4	0

x, in sec	f(x), in ft
0	1
1	4
2	7
3	10
4	13

